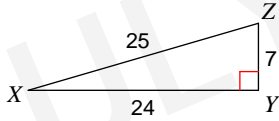


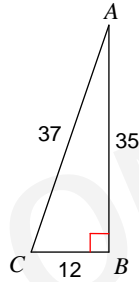
# Sine Cosine Tangent Worksheet

Find the value of each trigonometric ratio to the nearest ten-thousandth.

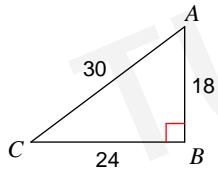
1)  $\sin X$



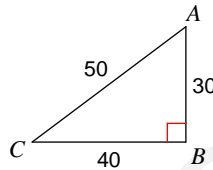
2)  $\sin C$



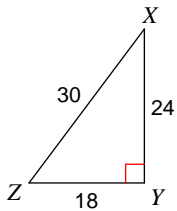
3)  $\tan C$



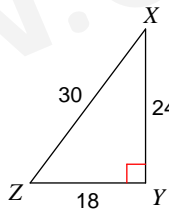
4)  $\cos C$



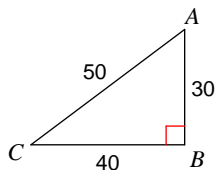
5)  $\sin Z$



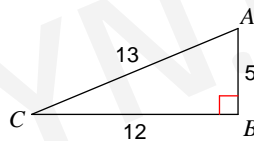
6)  $\tan Z$



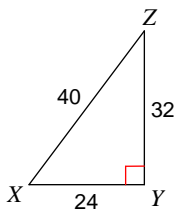
7)  $\tan C$



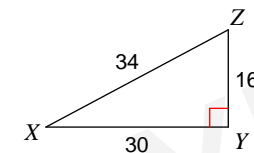
8)  $\sin C$



9)  $\cos X$



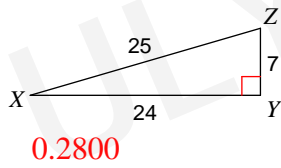
10)  $\tan X$



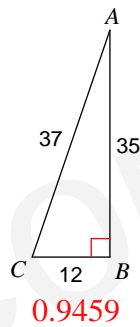
# Sine Cosine Tangent Worksheet

Find the value of each trigonometric ratio to the nearest ten-thousandth.

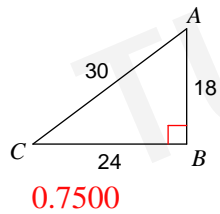
1)  $\sin X$



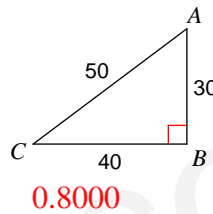
2)  $\sin C$



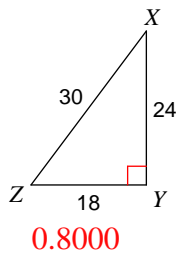
3)  $\tan C$



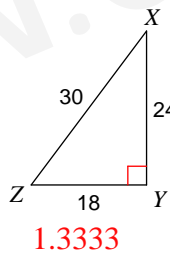
4)  $\cos C$



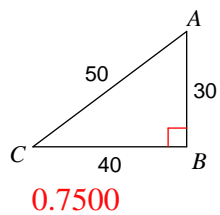
5)  $\sin Z$



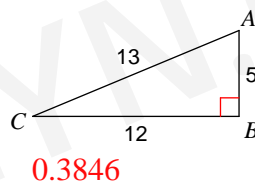
6)  $\tan Z$



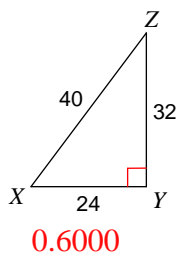
7)  $\tan C$



8)  $\sin C$



9)  $\cos X$



10)  $\tan X$

